


 **Weeny Reading**

Math

5-6yrs



Designed and illustrated by
Liam Fitzpatrick



 Weeny Reading

Math

SAMPLE

5-6yrs

DO NOT COPY







































Let's count !





































Designed &
Illustrated
by

LIAM FITZPATRICK

K2 MATH CONTENTS


	1	LET'S COUNT TO FIVE		
	2	LET'S COUNT TO TEN		
	3	FROM ONE TO FIVE		
	4	FROM SIX TO TEN		
	5	LET'S MAKE FIVE		
	6	WORD SEARCH ONE TO FIVE		
	7	MAKE UP TEN		
	8	MATCH THEM UP		
	9	LET'S COUNT TO FIFTEEN		
	10	WORD SEARCH 11 TO 15		
	11	LET'S COUNT TO TWENTY		
	12	MATCH THEM UP		
	13	MAKE UP TWENTY		
	14	NUMBER MAZE FROM 1 TO 20		
	15	MEASURING LENGTH		
	16	USING BIGGER NUMBERS		
	17	EVEN BIGGER NUMBERS		
	18	WHICH IS LONGER?		
	19	LONGER AND SHORTER		
	20	ODD ONE OUT		
	21	SHAPES		
	22	LOOKING FOR SHAPES		
	23	GUESS THE SHAPE		
	24	SHAPE PATTERNS		

K2 SCIENCE CONTENTS

	25	SHAPE SIZE		
	26	SHAPE ART		
	27	WHICH HAS MORE?		
	28	MAKE IT EQUAL		
	29	HOW MANY ALL TOGETHER		
	30	WHICH HAS FEWER		
	31	TAKE AWAY		
	32	SETS OF TEN		
	33	HOW MUCH DOES IT WEIGH ?		
	34	WHICH IS HEAVIER ?		
	35	HEAVIER THAN		
	36	GRAMS AND KILOGRAMS		
	37	POSITIONS		
	38	MORE POSITIONS		
	39	CLOCK		
	40	O'CLOCK		
	41	HALF OF THE HOUR		
	42	IN FIVE MINUTES		
	43	FISHY GRAPH		
	44	EGG GRAPH		
	45	FRUIT GRAPH		
	46	TWO EQUAL PARTS		
	47	LET'S MAKE A HALF		
	48/49	CUTOUT: CLOCK		



READING



1. LET'S COUNT

Let's count and colour from 1 to 5.

Colour in the right amount.

1

one



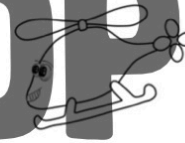
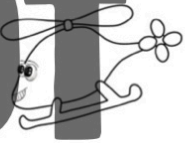

2

two



3

three



4

four



5

five




TEACHER AID :

How many scissors do you have in your craft box?

How many pencils / erasers / colouring pencils / apples do you have in your craft box?

Practice answering "I have one scissors in my craft box." " I don't have any apples in my craft box"

2. FROM SIX TO TEN




Match up the numbers and number words.

6
six




7
seven




8
eight



9
nine




10
ten



TEACHER AID : "How many pineapples are you going to colour?"
Practice answering "I'm going to colour six pineapples."



READING




3. FROM ONE TO FIVE

Let's learn the English words for these numbers.

Match up the numbers and number words.

one

SAMPLE



one

four



two

five

DO NOT COPY



three

two

OR SHARE



four

three



five



3

TEACHER AID :


How old are you?

"I have five fingers on one hand."

Look around the classroom. "There is one clock."

Practice "there is" "there are"

4. FROM SIX TO TEN



Match up the numbers and number words.

seven

nine

ten

six

eight

SAMPLE

DO NOT COPY

OR SHARE



six



seven



eight



nine




ten

TEACHER AID : I have ten fingers all together. There are ? windows in this classroom.
Again practice "there is" and "there are"





READING



5. LET'S MAKE FIVE

Add two numbers together to make five.

Listen to the teachers instructions and colour in the picture.





$$\square + \square = 5$$

five

$$\square + \square = 5$$

five



$$\square + \square = 5$$

five

$$\square + \square = 5$$


five



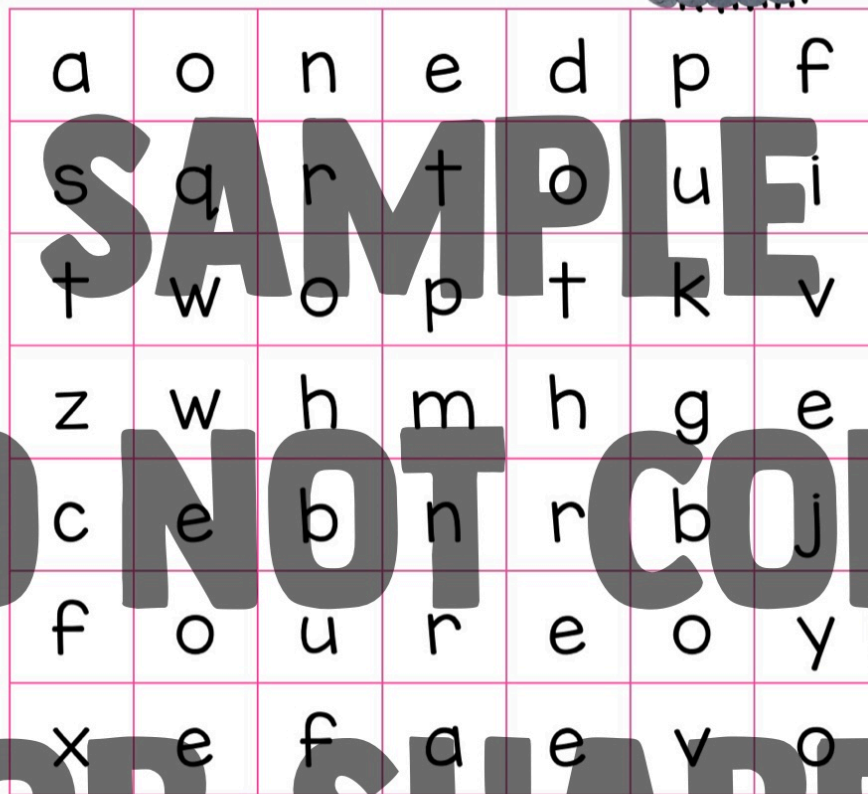
TEACHER AID :

Discuss what two numbers make five, eg. two and three. Ask a student to pick a colour, then colour in two objects. Again, ask a different student to pick a colour and colour in three objects. This helps them to visually see what makes up five.

6. WORD SEARCH



You are great at finding wood lice.
Now try to find all the numbers from one to five.




1. one 2. two 3. three 4. four 5. five

I am _____ years old.


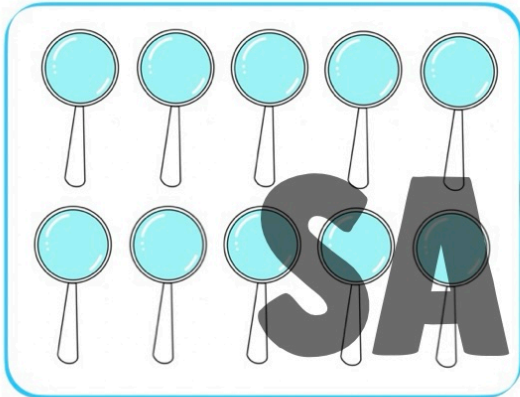


READING



7. MAKE UP TEN

Add two numbers together to make ten.
Listen to the teachers instructions and colour in the picture.


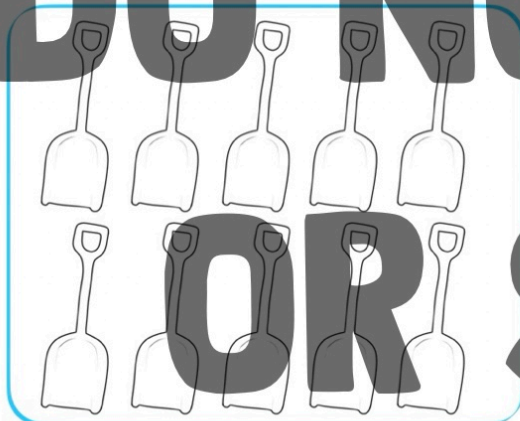


$$\square + \square = 10$$

ten

$$\square + \square = 10$$

ten



$$\square + \square = 10$$

ten

$$\square + \square = 10$$


ten



TEACHER AID :

Discuss what two numbers make ten, eg. four and six. Ask a student to pick a colour, then colour in four objects. Again, ask a different student to pick a colour and colour in six objects. This helps them to visually see what makes up ten.

8. MATCH THEM UP



Match up the number to the number words.



five

two

four



four

eight

nine



one

four

seven



six

nine

one



nine

six

ten




four

ten

three



READING



9. LET'S COUNT TO FIFTEEN

Let's count and colour from 11 to 15.

Colour in the right amount.

11
eleven




12
twelve



13
thirteen



14
fourteen



15
fifteen




TEACHER AID :

How many are there in K2?

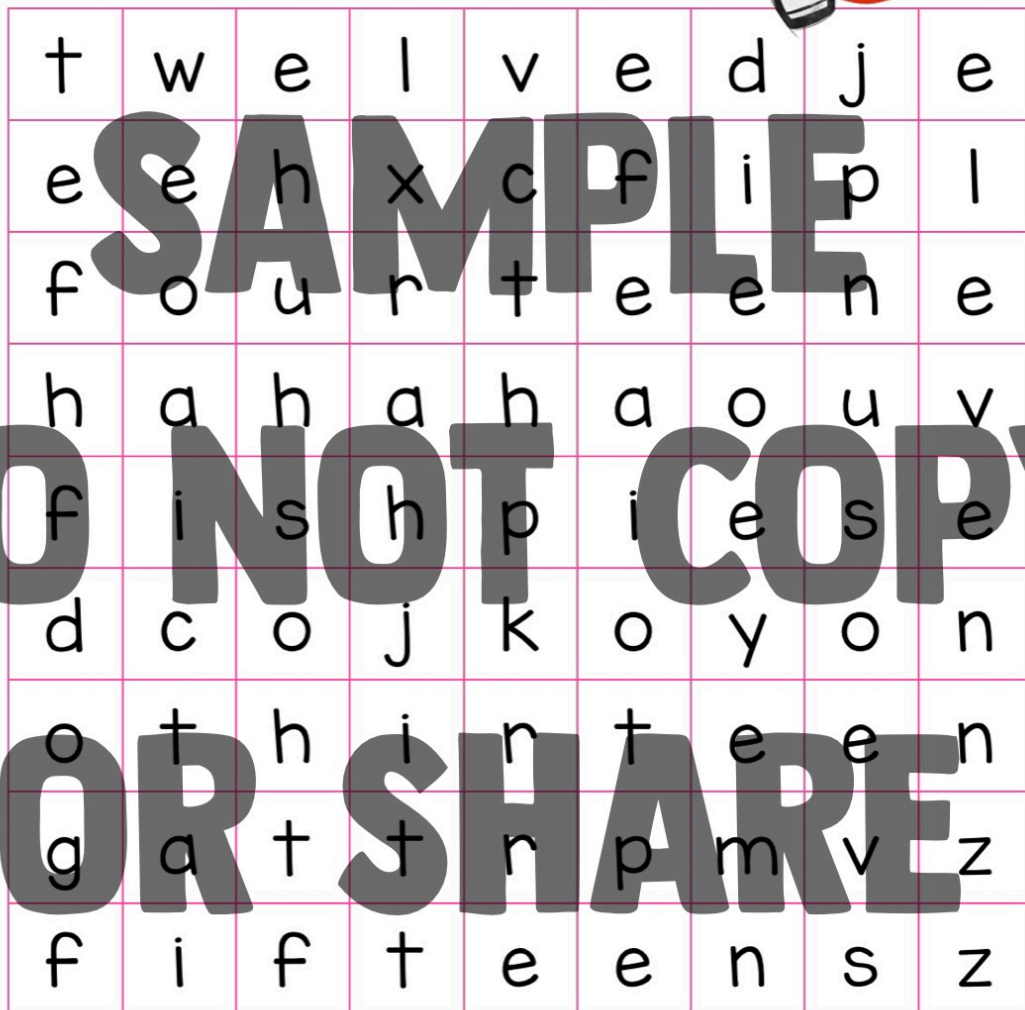
How many boys / girls in K2?

Which are there more of?

10. WORD SEARCH 11 TO 15



Use your superpowers to find these.
Find all the numbers from eleven to fifteen.



11. eleven

12. twelve

13. thirteen

14. fourteen

15. fifteen